


Name: _____

Class: _____

REVISION FOR FINAL TEST 2 – MATHS 2


Multiplication	Phép tính nhân	Division	Phép tính chia
Times	Dấu x	Dividend	Số bị chia
Factor	Thừa số	Divisor	Số chia
Product	tích	Quotient	Thương
Times table 2	Bảng nhân 2	Divided by	Dấu chia
subtraction	Phép tính trừ	equals	Dấu =
Minuend	Số bị trừ	Minute hand	Kim phút
Subtrahend	Số trừ	Hour hand	Kim giờ
Difference	Hiệu	clock	Đồng hồ
minus	Dấu trừ	It's 7 o'clock.	7 giờ


Part 1. Look and write.


$5 \times 6 = 30$ 	p
_roduct	s
	c

$14 : 2 = 7$	t
_ivision	d
	g

$45 + 12 = 57$	a
_ddition	e
	i

	z
_imes	l
	t

	n
_inute	m
	l

$25 - 15 = 10$ 	r
_ubtrahend	z
	s

Part 2. Look, circle and write.

a. $2 \times 6 = 12$

Twosix equals twelve.

plus
times



b.

This is a

clock
time

c. $10 : 5 = 2$

This is a

multiplication
division

d. $20 - 10 = 10$ Twenty is a

difference
minuend

e. $20 - 15 = 5$ Five is a

difference
minuend



f. The hour hand is

eleven
twelve

g. $2 \times 6 = 12$ This is a..... times table.

six
two

h. $2 \times 3 = 6$ The firstis two.

minuend
factor

i. $8 : 2 = 4.$ Eighttwo is four.

divided by
times

j. $8 : 2 = 4.$ Theis four.

divisor
quotient

Part 3. Read and write.

Tom shares **20** cupcakes **equally** with **2** friends. How many cakes does **each** friend have?

Solution:



Each friend hascupcakes.