

Fullname: Class:

REVISION FOR FINAL TEST 2 – ENGLISH FOR MATH 3

A. LANGUAGE CONTENTS:

Unit 3

times

equals

without renaming

with renaming

remainder

division without remainder

division with remainder

Unit 4

sphere

cuboid

cube

cylinder

pyramid

cone

millimeter

centimeter

decimeter

meter

decameter

hectometer

kilometer

center

diameter

Unit 6

ones

tens

hundreds

thousands

equal to

more digits

greater than

smaller than

same number of digits





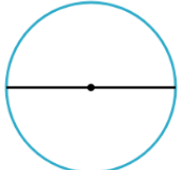


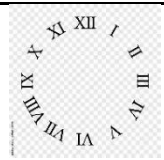
Unit 7

roman numerals

VND

B. PRACTICE:



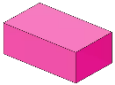
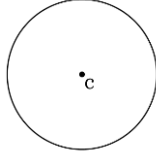
I. Look and match.

1.		a. This is the smallest 3-digit number.
2.		b. Forty-nine thousand, eight hundred and twenty
3.		c. It's Roman numerals
4.		d. This is the greatest 3-digit number.
5.		e. It's a pyramid
6.		f. It's twelve o'clock.
7.		g. It's a cylinder
8.		h. It's a diameter.

Your answers:

1-	2-	3-	4-
5-	6-	7-	8-

II. Look, read and circle.

1.  a. It's six o'clock. b. It's four o'clock.	2.  a. It's half past six. b. It's three o'clock.
3.  a. It's a cuboid. b. It's a cube.	4.  a. A circle with center B. b. A circle with center C.

III. Look, read and write.

1. It's a **t**____-digit number.

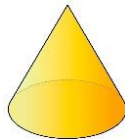
4. P is the **c**____ of the circle.

2. It's a **t**_____.



5. They are **f**____-digit numbers.

3. This is a **c**_____



6. A road is two thousand **k**_____ long.

IV. Read and circle.

1. The addends are 200 and 408. The sum is

A. 608

B. 600

C. 708

2. The addends are 104 and 512. The sum is.....

A. 614

B. 615

C. 616

3. The smallest five-digit number is

A. 99 999


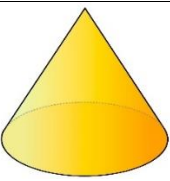



B. 9 999

C. 10 000

4. The smallest 3-digit number is

- A. 100 B. 999 C. 901
5. The greatest four- digit number is.....
- A. 9999 B. 999 C. 99
6. The radius of a circle is 42 cm. The diameter of this circle iscm
- A. 96 B. 84 C. 92
7. The radius of a circle is 24 cm. The diameter of this circle is cm.
- A. 24 B. 96 C. 48
8. The diameter of a circle is 100 dm. The radius of the circle is dm.
- A. 25 B. 50 C. 200
9. Order the numbers from smallest to the greatest: 53 218, 31 312, 31 862.
- A. 53 218, 31 862, 31 312 B. 31 862, 31 312, 53 218
- C. 31 312, 31 862, 53 218
10. Find the 3-D shapes.
- A. cube B. circle C. square

V. Look, read and match.

				
A	B	C	D	E

1. Roman numerals
 2. It's a cone.
 3. It's money.
 4. They are greater than, less than and equal to.
 5. This is the greatest 2-digit number.

VI. Read and fill in the blank.

1. Peter has 62 000 VND. His sister gives him 18 000 VND. How much money does Peter have?

Solution:

			=	
--	--	--	---	--

Peter has VND.

2. Lisa had 90 400 VND. She spent 50 100 VND on candy. How much money does she have left now?

Solution:

			=	
--	--	--	---	--

Lisa had VND left.

3. Sam had 150 000 VND. She spent 123 000 VND on a dress. How much money does she have left now?

Solution:

			=	
--	--	--	---	--

Sam had VND left.